

DELHI PUBLIC ACADEMY

WINTER HOLIDAY HOMEWORK 2019-20

Sub - ENGLISH


Name of student _____

Class - U.K.G

Q 1 → Write the five Fruits name.











Q 2 → Make a action word with -ing.

1 - Jump _____

2 - Run _____

3 - Eat _____

4 - Bath _____

5 - Smile _____



Q 3 → Use of We and They.

1 - He is Ravi. He is Sudheer _____ are friends.

2 - I am Anil. you are Sunil _____ are singers.



STORY

THE CAPSELLER AND THE MONKEYS

On a hot summer afternoon, a capseller got tired. He sat under a tree and had his food. After some time he fell asleep.

Soon monkeys on the tree saw the capseller's bundle. They came down and opened the bundle. They saw caps and took all of them on the tree.

Suddenly the capseller got up. He saw the monkeys with his caps on their heads. He shouted at them and threw his cap down. Seeing this the monkeys also threw their caps down.

The capseller picked them up and tied them in a bundle and he went on his way.

Moral → Wisdom works where strength fails.

हिन्दी

प्र०१ → अक्षर व मात्रा मिलाकर शब्द लिखिए-

१.- स + ७ + म + न = _____

२.- क + २ + स + र = _____

३.- प + १ + धा = _____


४.- म + १ + त + १ = _____

प्र०२ → फलों के नाम लिखो-











प्र०३ → विलोम शब्द -

(1) अंदर → _____ (2) ऊपर → _____

(3) नया → _____ (4) ठंडा → _____

प्र०४ → रंगों के नाम लिखो-

(1) _____ (2) _____

(3) _____ (4) _____

(5) _____

प्र०५ → लिंग बदलो-

(1) मीर → _____ (2) गाय → _____

(3) राजा → _____ (4) लड़का → _____

(5) तौता → _____

प्र०-6 → एकवचन से बहुवचन बनाओ-

तीता → _____

कमरा → _____

गुच्छा → _____

तारा → _____

घोड़ा → _____

प्र० 7 → राम विद्यालय जाता है।

_____ (1)

_____ (2)

_____ (3)

_____ (4)

_____ (5)

_____ (6)

_____ (7)

_____ (8)

_____ (9)

_____ (10)

Math's

one, two, three, four, five, six, seven, eight, nine, ten, eleven, twelve

Q.1:- write the numbers name.

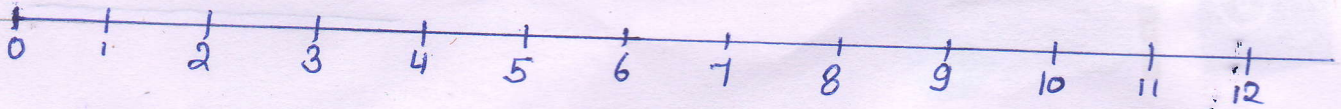
1. 36 _____

2. 24 _____

3. 18 _____

4. 8 _____

Q.2. skip counting in 3's



Q.3:- One digit addition.

$$\begin{array}{r} +3 \\ 4 \\ \hline \square \end{array}$$

$$\begin{array}{r} +2 \\ 3 \\ \hline \square \end{array}$$

$$\begin{array}{r} +4 \\ 5 \\ \hline \square \end{array}$$

$$\begin{array}{r} +0 \\ 6 \\ \hline \square \end{array}$$

$$\begin{array}{r} +7 \\ 2 \\ \hline \square \end{array}$$

Q.4:- One digit subtraction.

$$\begin{array}{r} -7 \\ 3 \\ \hline \square \end{array}$$


$$\begin{array}{r} -5 \\ 2 \\ \hline \square \end{array}$$

$$\begin{array}{r} -4 \\ 1 \\ \hline \square \end{array}$$

$$\begin{array}{r} -9 \\ 5 \\ \hline \square \end{array}$$

$$\begin{array}{r} -7 \\ 2 \\ \hline \square \end{array}$$

Q.5:- Arrange the ascending number



Fill the colour

